


Hot Stew Review




Decimals

Know Your Veggies!

Question 1

Gypsy bought a ticket to a basketball game for \$37.56. How is the ticket price written in expanded notation?




Answer

Answer 1

$(3 \times 10) +$
 $(7 \times 1) +$
 $(5 \times 0.1) +$
 (6×0.01)

Chef's Choice




1



Pick Your Vegetable!

Reveal Points

1




Record Your Points!

Next Question

Question 2

The distance from my house to the elementary school is 4.658 miles. The distance from my house to the grocery store is 4.586 miles. Write a comparison statement comparing the distances.




Answer

Answer 2

$4.658 > 4.586$

Chef's Choice



2



Pick Your Vegetable!

Reveal Points