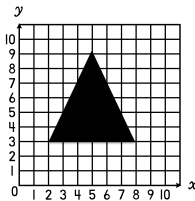


Question #1

Locate and name the ordered pair for each corner of the triangle.



Answer

©TeachingintheFastLaneLLC2018

Answer #1

(5,9)
(2,3)
(8,3)

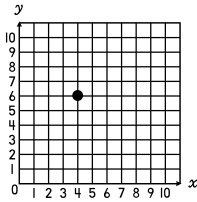


Choose Points!

©TeachingintheFastLaneLLC2018

Question #2

What ordered pair is 3 down and 2 to the right of the identified point?



Answer

©TeachingintheFastLaneLLC2018

Answer #2

(6,3)

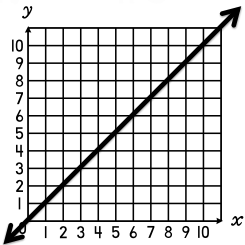


Choose Points!

©TeachingintheFastLaneLLC2018

Question #3

Would the point (4,7) be found above or below the line?




Answer

©TeachingintheFastLaneLLC2018

Answer #3

above the line



Choose Points!

©TeachingintheFastLaneLLC2018