

# 4TH GRADE *Multiplication* TASK CARDS



# THANK YOU FOR YOUR PURCHASE



DEAR TEACHER,


THIS RESOURCE IS FOR YOUR PERSONAL CLASSROOM USE IN ONE CLASSROOM ONLY. IF YOU WOULD LIKE ADDITIONAL COPIES FOR YOUR TEAMMATES, YOU CAN PURCHASE ADDITIONAL LICENSES FOR A DISCOUNT. TO PURCHASE ADDITIONAL LICENSES, GO TO YOUR "MY PURCHASES" PAGE ON TPT AND SELECT THE NUMBER OF LICENSES YOU WISH TO PURCHASE.



1 User License(s) Purchased ?

PLEASE VISIT MY  
**TEACHERS PAY TEACHERS** STORE:  
TEACHING IN THE *Fast Lane*  
FOR MANY DIFFERENT PRODUCTS!

[BITLY.COM/SHOPTEACHINGINTHEFASTLANE](https://bitly.com/shopteachingintheFastLane)  
[WWW.TEACHINGINTHEFASTLANE.COM](http://WWW.TEACHINGINTHEFASTLANE.COM)



*Credits:*



Cover photo from Deposit Photos

TERMS OF USE: © 2017 TeachingInTheFastLaneLLC. ALL RIGHTS RESERVED. PURCHASE OF THIS PRODUCT ENTITLES THE PURCHASER THE RIGHT TO REPRODUCE THE PAGES FOR ONE CLASSROOM ONLY. DUPLICATION FOR MORE THAN ONE CLASSROOM SUCH AS ANOTHER TEACHER, GRADE LEVEL, SCHOOL, OR DISTRICT IS STRICTLY FORBIDDEN WITHOUT WRITTEN PERMISSION FROM THE AUTHOR. COPYING ANY PART OF THIS PRODUCT AND PLACING IT ON THE INTERNET IN ANY FORM IS STRICTLY FORBIDDEN AND IS A VIOLATION OF THE DIGITAL MILLENNIUM COPYRIGHT ACT (DMCA).





# MATH TASK CARDS

Included in this product are:

- 24 task cards with questions based on the 4<sup>th</sup> grade math TEKS
- Recording sheet for students to record their answers
- Answer key so that you or the students can check their work

Some ideas for using these cards are:

- Test prep and review
- As a center
- Partner work
- Small group review or activity
- Independent work
- Scavenger hunt  
(My personal favorite-hang the cards in random order all around the room. Students hunt for each card and record their answers.)
- Play a whole class game such as Scoot
- Play Quiz-Quiz-Trade

# MATH TASK CARDS

Teacher Instructions:

1. Print product on cardstock for durability
2. Laminate and cut apart individual task cards
3. Copy enough answer sheets for each student to have one.
4. Store in a folder, envelope, sealing bag, or hole punch each card and place them on a ring.

**1**

There are twenty-eight students in the after school running club. Each student runs 9 laps around the track. How many total laps were run?

**2**

A package of dog treats has four rows of bone shaped treats in it. Each row has eighteen treats in it. How many treats are in the box?

**3**


A television show is 26 minutes long when you take out the commercials. How many minutes would it take you to watch a season of 22 episodes if you watched it straight through?

**4**

A book series has exactly 234 pages in each book. There are 7 books in the series. How many pages are in the whole series?

5

What multiplication facts does the array show?



6

There are 68 dresses for sale at a store. Each dressed is marked as on clearance and priced at \$16 each. How much would it cost to buy all of the dresses?

7

There are currently 32 shoes in a window display. Name the factor pairs for the number of shoes in the window.

8

A container of animal crackers has 28 crackers in it. A box of animal crackers has 15 containers in it. How many animal crackers are in the box?

**9**

There are 137 students in the 4<sup>th</sup> grade at Avrille Lane Elementary. Each student created 7 pieces of art for the art show. How many pieces of art did the 4<sup>th</sup> graders create for the art show?

**10**

A grocery store stocker is stacking cans of green beans on a shelf. They stack 34 cans in each row. If there are 12 rows, how many cans do they stack?

**11**

The school choir has 87 members. Each member has six pieces of sheet music in their folder. How many total pieces of sheet music does the choir have?

**12**

A boxed set of DVDs has 24 discs.

Name the factor pairs for the number of DVDs in the boxed set.


# 13

Grant receives \$6 in allowance each week. How much allowance does he earn in a year?

Hint: There are 52 weeks in a year.

# 14

What multiplication facts does the array show?



# 15

The student council is selling magazines as a fundraiser. Each subscription is \$14 and the student council gets to keep \$10 of those dollars. How much money would they make selling 225 subscriptions?

# 16

A veterinarian's office sees 45 patients per day. Each patient pays a base rate of \$65 for the visit. How much does the office earn per day with only the base rate?



# 17

An eyeglass display has 56 pairs of glasses to choose from.

Name the factor pairs for the number of glasses on display.

# 18

There are 24 hours in a day. On average you sleep for 9 hours each day. How many hours of sleep would you get in a 31 day month?

# 19

How much wall space would you need to place 7 extra large bookcases next to one another?

Size	Width
small	14 in
medium	18 in
large	36 in
extra large	44 in

# 20

Kaveen is baking bread. She needs 3 cups of flour for each loaf of bread. How many cups of flour would she need to bake two dozen loaves?

**21**

Sabrina's monthly rent is \$1,285.


How much money does she spend on rent over nine months?

**22**

Donald gives haircuts to his friends on the weekends. Last Saturday he cut 8 of his friends' hair and they each paid him \$12. How much money did he earn?

**23**

What multiplication facts does the array show?



**24**

A basketball team has 2,314 raffle tickets to sell to pay for their trip to a tournament. If they sell all the tickets for \$7 each, how much money do they earn?

Name \_\_\_\_\_ # \_\_\_\_\_ Date \_\_\_\_\_

## Multiplication Task Cards

1	2	3	4	5	6
7	8	9	10	11	12
13	14	15	16	17	18
19	20	21	22	23	24

# Answer Key

## Multiplication Task Cards

1 252 laps	2 72 treats	3 572 minutes	4 1,138 pages	5 $9 \times 9 = 81$	6 \$1,088
7 $1 \times 32 = 32$ $2 \times 16 = 32$ $4 \times 8 = 32$	8 420 animal crackers	9 259 pieces of art	10 408 cans	11 52 pieces	12 $1 \times 24 = 24$ $2 \times 12 = 24$ $3 \times 8 = 24$ $4 \times 6 = 24$
13 \$312	14 $5 \times 9 = 45$ $9 \times 5 = 45$	15 \$2,250	16 \$2,925	17 $1 \times 56 = 56$ $2 \times 28 = 56$ $7 \times 8 = 56$	18 279 hours
19 308 inches	20 72 cups of flour	21 \$11,565	22 \$75	23 $7 \times 8 = 56$ or $8 \times 7 = 56$	24 \$16,198