


Question 1

Identify the numerical pattern below.

4, 16, 48, 192, ...




Answer

Answer 1

$\times 4$


Chef's Choice




Question 2

Create an input-output table to represent the situation below.

The hike around a lake is 3 miles. There are five additional loops you can hike in addition to the lake hike. What will be the total distance hiked if the extra loops are 2, 4, 7, and 11 miles?



Answer

Answer 2

INPUT	OUTPUT
2	5
4	7
7	10
11	14

Chef's Choice

